

## AP Human Geography – Assignment 1

AP Human Geography students should be able to identify and locate the physical and political features in the world, the continents, and oceans, have a working knowledge of global regions, and the countries found within them. Students are to identify, review, and study the locations of these physical and political features for map quizzes throughout the year. The map packet is due **on the day your class first meets**.

There are 12 maps. (Think about completing 2 maps a week.)

- \*Maps should be labeled and colored

- \*Maps and labels should be neat. Labels should be horizontal.

- \*Maps have a key/legend.

- \* Do not put letters or numbers on your map. If you cannot fit a name on the map, draw lines/arrows and write the names out to the side.

- \*Pay attention to the directions for each specific map.

- \* **Do not** procrastinate, **pace yourself**

# AP HUMAN GEOGRAPHY SUMMER ASSIGNMENT

## Global Geography 1: Africa

### Step 1: Label and Color the following political map of Africa

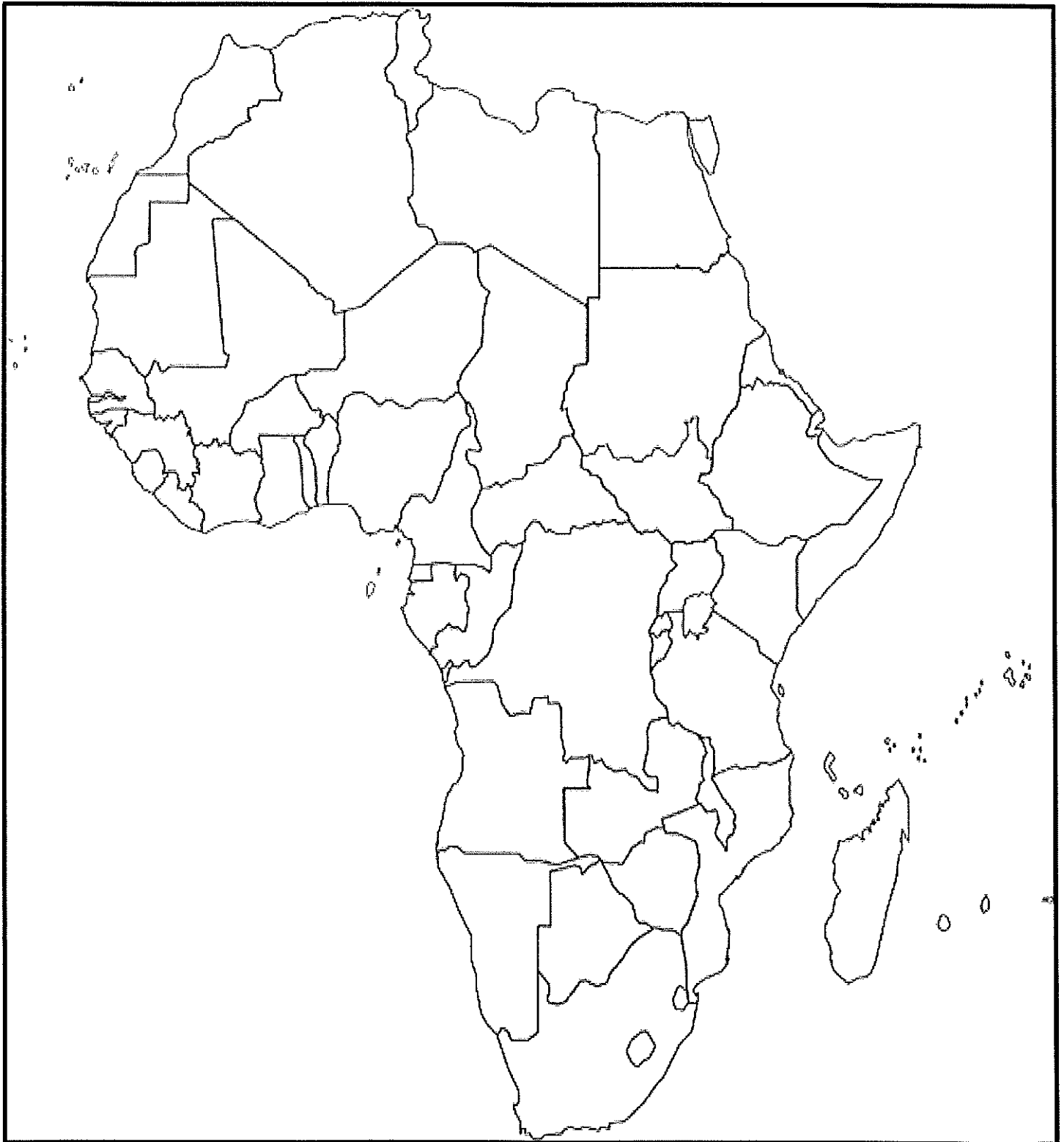
Regions/Countries	Key Cities	External Bodies of Water
<ul style="list-style-type: none"> <li>• There are five (5) regions of Africa.</li> <li>• Pick a color for each region</li> <li>• Create a key on your map.</li> <li>• Label all the countries.</li> <li>• Color in each region.</li> <li>• Below are the regions</li> </ul>	<ul style="list-style-type: none"> <li>• Cairo</li> <li>• Cape Town</li> <li>• Algiers</li> <li>• Mogadishu</li> <li>• Nairobi</li> <li>• Lagos</li> <li>• Kinshasa</li> <li>• Casablanca</li> <li>• Tripoli</li> <li>• Harare</li> <li>• Abidjan</li> <li>• Addis Ababa</li> <li>• Dakar</li> <li>• Dar es Salaam</li> <li>• Luanda</li> <li>• Johannesburg</li> </ul>	<ul style="list-style-type: none"> <li>• Mediterranean Sea</li> <li>• Red Sea</li> <li>• Indian Ocean</li> <li>• Atlantic Ocean</li> <li>• Cape of Good Hope</li> </ul>

North Africa	West Africa	Central Africa	East Africa	Southern Africa
EGYPT LIBYA TUNISIA ALGERIA MOROCCO W.SAHARA MAURITANIA MALI NIGER CHAD SUDAN	SENEGAL GAMBIA GUINEA-BISSAU GUINEA SIERRA LEONE LIBERIA COTE D'IVOIRE GHANA BURKINA FASO TOGO BENIN CAPE VERDE	NIGERIA CAMEROON GABON SAO TOME & THE PRINCIPE EQUATORIAL GUINEA CENTRAL AFRICAN REPUBLIC REP. OF THE CONGO DEM. REP. OF THE CONGO	KENYA UGANDA TANZANIA BURUNDI RWANDA ETHIOPIA ERITREA DJIBOUTI SOMALIA MADAGASCAR SEYCHELLES COMOROS MAURITIUS SOUTH SUDAN	ANGOLA SOUTH AFRICA LESOTHO BOTSWANA ZAMBIA NAMIBIA SWAZILAND MOZAMBIQUE ZIMBABWE MALAWI

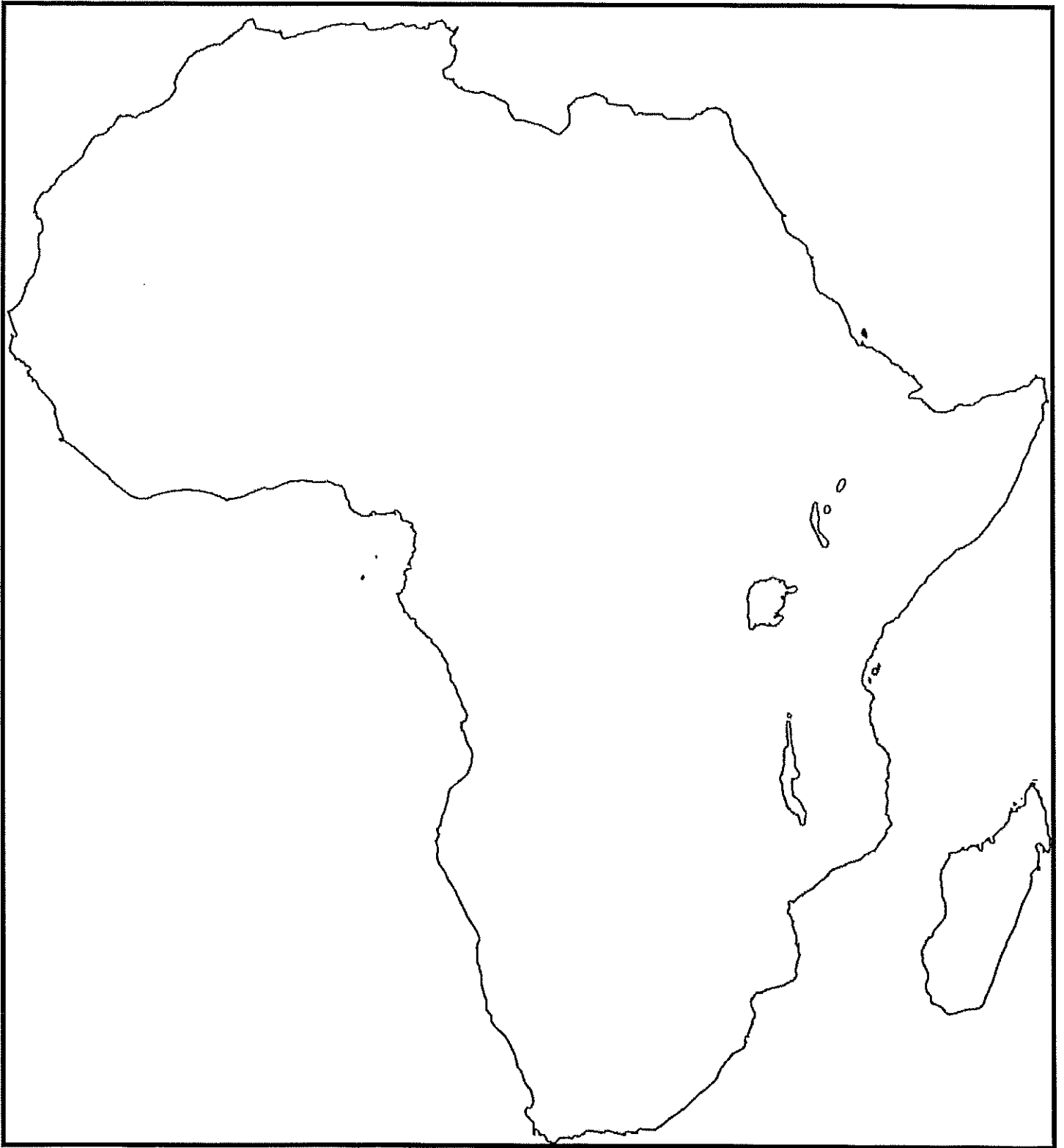
**Step 2: Label and Color the following on the physical map of Africa:**

Key Environmental Features	Geographical Features	Geographical Features
<p><b>There are five (5) key ecological areas in Africa.</b></p> <ul style="list-style-type: none"> <li>• Desert</li> <li>• Semi desert</li> <li>• Steppe</li> <li>• Savanna Grasslands and Woodland Savanna (put together as one on your map)</li> <li>• Tropical Rainforest</li> </ul> <p><b>Directions:</b></p> <ul style="list-style-type: none"> <li>• Pick a color for each area.</li> <li>• Create a key on your map.</li> <li>• Color in each area on map.</li> </ul>	<p><b>Internal Bodies of Water:</b></p> <ul style="list-style-type: none"> <li>• Lake Victoria</li> <li>• Lake Malawi</li> <li>• Lake Tanganyika</li> <li>• Nile River</li> <li>• Congo River</li> <li>• Niger River</li> <li>• Limpopo River</li> <li>• Zambezi River</li> <li>• Orange River</li> </ul> <p><b>Other:</b></p> <ul style="list-style-type: none"> <li>• Great Rift Valley</li> <li>• Horn of Africa</li> <li>• Suez Canal</li> <li>• Congo Basin</li> <li>• Equator</li> <li>• Tropic of Capricorn</li> <li>• Tropic of Cancer</li> </ul>	<p><b>Mountains:</b></p> <ul style="list-style-type: none"> <li>• Atlas Mountains</li> <li>• Drakensberg Mountains</li> <li>• Mt. Kilimanjaro</li> <li>• Mt. Kenya</li> <li>• Ethiopian Highlands</li> </ul> <p><b>Deserts:</b></p> <ul style="list-style-type: none"> <li>• Sahara Desert</li> <li>• Kalahari Desert</li> <li>• Namib Desert</li> </ul>

## Political Map of Africa



## Physical Map of Africa



## Global Geography 2: South America

### Step 1: Label and Color the following political map of South America

Regions/Countries	Key Cities	External Bodies of Water
<ul style="list-style-type: none"> <li>• <u>There are five (3) regions of South America.</u></li> <li>• Pick a color for each region</li> <li>• Create a key on your map.</li> <li>• Label all the countries.</li> <li>• Color in each region.</li> <li>• Below are the regions</li> </ul>	<ul style="list-style-type: none"> <li>• Sao Paulo</li> <li>• Buenos Aires</li> <li>• Caracas</li> <li>• Bogota</li> <li>• Lima</li> <li>• Santiago</li> <li>• Rio de Janeiro</li> <li>• La Paz</li> <li>• Montevideo</li> <li>• Asunción</li> <li>• Quito</li> <li>• Salvador</li> <li>• Medellin</li> <li>• Fortaleza</li> <li>• Brasilia</li> <li>• Belo Horizonte</li> <li>• Guayaquil</li> <li>• Cordoba</li> </ul>	<ul style="list-style-type: none"> <li>• Caribbean Sea</li> <li>• Pacific Ocean</li> <li>• Atlantic Ocean</li> <li>• Cape Horn</li> </ul>

Caribbean States	Pacific/Andean States	Atlantic States
COLOMBIA VENEZUELA GUYANA SURINAME FRENCH GUIANA*	ECUADOR PERU BOLIVIA CHILE	BRAZIL ARGENTINA URUGUAY PARAGUAY FALKLAND ISLANDS*

**Step 2: Label and Color the following on the physical map of South America:**

Key Environmental Features	Geographical Features	Geographical Features
<p><b>There are five (5) key ecological areas in South America.</b></p> <ul style="list-style-type: none"><li>• Desert</li><li>• Pampas (grassland)</li><li>• Tropical Rainforest</li><li>• Mountain (Alpine)</li><li>• Temperate forest</li></ul> <p><b>Directions:</b></p> <ul style="list-style-type: none"><li>• Pick a color for each area.</li><li>• Create a key on your map.</li><li>• Color in each area on map.</li></ul>	<p><b>Internal Bodies of Water:</b></p> <ul style="list-style-type: none"><li>• Amazon River</li><li>• Orinoco River</li><li>• Parana River-</li><li>• Rio de la Plata</li><li>• Lake Titicaca</li><li>• Lake Maracaibo</li></ul> <p><b>Other:</b></p> <ul style="list-style-type: none"><li>• Patagonia</li><li>• Tierra del Fuego</li><li>• Galapagos Islands</li><li>• The Llanos</li><li>• Equator</li><li>• Tropic of Capricorn</li><li>• Tropic of Cancer</li></ul>	<p><b>Mountains:</b></p> <ul style="list-style-type: none"><li>• Andes Mountains</li><li>• Brazilian Highlands</li><li>• Guiana Highlands</li></ul> <p><b>Deserts:</b></p> <ul style="list-style-type: none"><li>• Atacama Desert</li></ul>

## Political Map of South America





## Physical Map of South America



## Global Geography 3: Asia

### Step 1: Label and Color the following political map of Asia

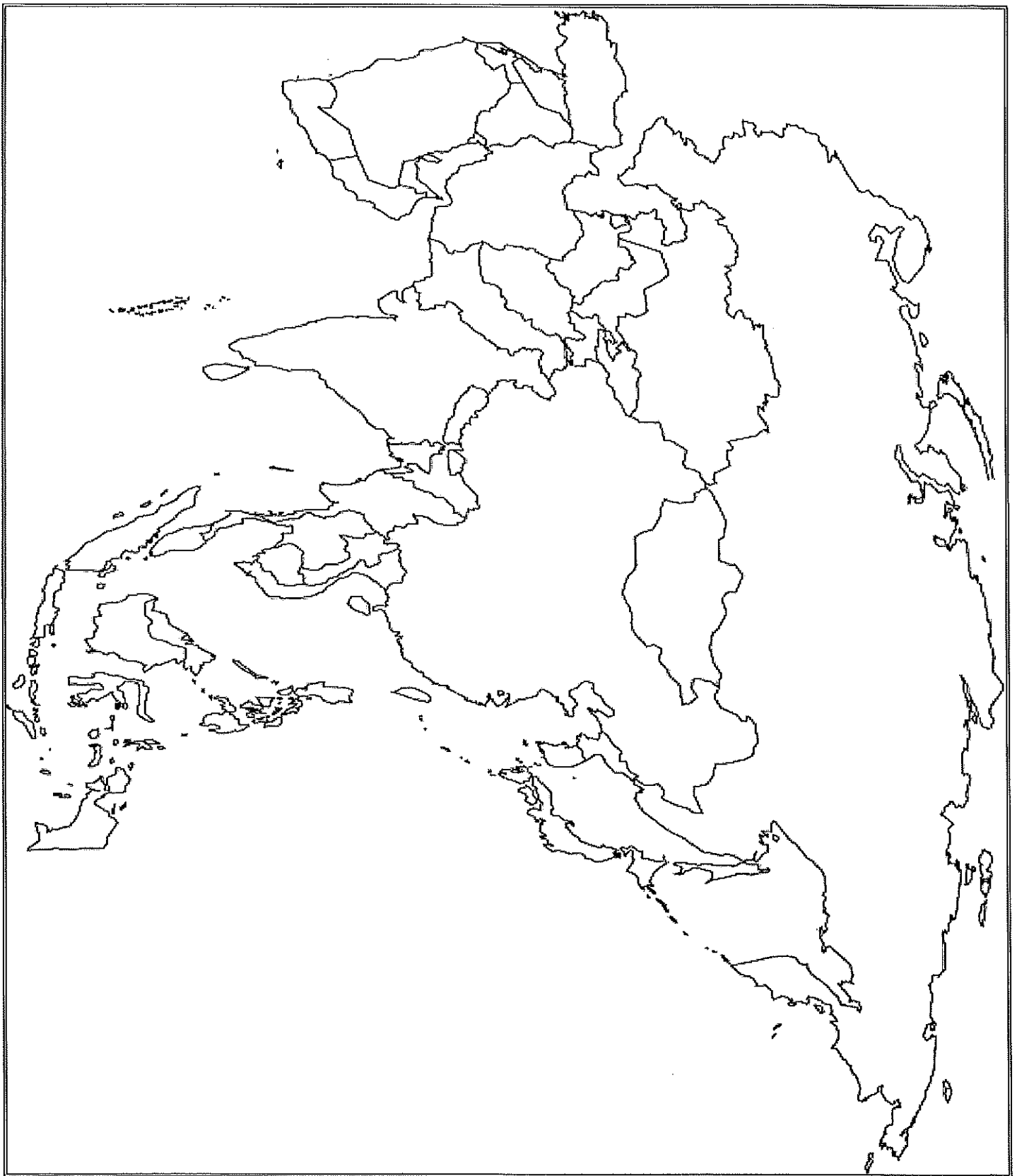
Regions/Countries	Key Cities	External Bodies of Water
<ul style="list-style-type: none"> <li>• There are five (5) regions of Asia.</li> <li>• Pick a color for each region</li> <li>• Create a key on your map.</li> <li>• Label all the countries.</li> <li>• Color in each region.</li> <li>• Below are the regions</li> </ul>	<ul style="list-style-type: none"> <li>• Jerusalem</li> <li>• Mecca</li> <li>• Dubai</li> <li>• Baghdad</li> <li>• Karachi</li> <li>• Tehran</li> <li>• Mumbai</li> <li>• Shanghai</li> <li>• Beijing</li> <li>• Hong Kong</li> <li>• Seoul</li> <li>• Tokyo</li> <li>• Manila</li> <li>• Bangkok</li> <li>• Jakarta</li> <li>• Kuala Lumpur</li> <li>• Delhi</li> <li>• Osaka</li> <li>• Riyadh</li> <li>• Tianjin</li> <li>• Taipei</li> <li>• Singapore</li> <li>• Ho Chi Minh City (Saigon)</li> <li>• Dhaka</li> </ul>	<ul style="list-style-type: none"> <li>• Mediterranean Sea</li> <li>• Arabian Sea</li> <li>• Indian Ocean</li> <li>• Pacific Ocean</li> <li>• Sea of Japan</li> <li>• South China Sea</li> <li>• Yellow Sea</li> <li>• Bay of Bengal</li> <li>• Persian Gulf</li> <li>• Red Sea</li> <li>• Strait of Hormuz</li> <li>• Gulf of Aden</li> <li>• Strait of Malacca</li> <li>• East China Sea</li> <li>• Gulf of Tonkin</li> <li>• Philippine Sea</li> </ul>

Middle East	Central Asia	South Asia	East Asia	Southeast Asia
ISRAEL/PALESTINE JORDAN SYRIA LEBANON SAUDI ARABIA YEMEN OMAN UNITED ARAB EMIRATES QATAR BAHRAIN KUWAIT IRAQ	PAKISTAN AFGHANISTAN IRAN TAJIKISTAN TURKMENISTAN KYRGYZSTAN KAZAKHSTAN UZBEKISTAN	INDIA SRI LANKA MALDIVES BANGLADESH NEPAL BHUTAN	MONGOLIA CHINA HONG KONG (SAR) MACAO (SAR) JAPAN NORTH KOREA SOUTH KOREA PHILIPPINES TAIWAN*	MYANMAR THAILAND LAOS CAMBODIA VIETNAM INDONESIA BRUNEI EAST TIMOR MALAYSIA SINGAPORE

**Step 2: Label and Color the following on the physical map of Asia:**

Key Environmental Features	Geographical Features	Geographical Features
<p><b>There are five (6) key ecological areas in Asia.</b></p> <ul style="list-style-type: none"> <li>• Desert</li> <li>• Mountains</li> <li>• Steppe</li> <li>• Grassland</li> <li>• Tropical Rainforest</li> <li>• Coniferous /Temperate forest</li> </ul> <p><b>Directions:</b></p> <ul style="list-style-type: none"> <li>• Pick a color for each area.</li> <li>• Create a key on your map.</li> <li>• Color in each area on map.</li> </ul>	<p><b>Internal Bodies of Water:</b></p> <ul style="list-style-type: none"> <li>• Caspian Sea</li> <li>• Tigris/Euphrates River</li> <li>• Yangtze River</li> <li>• Huang He River</li> <li>• Mekong River</li> <li>• Indus River</li> <li>• Brahmaputra River</li> <li>• Ganges River</li> </ul> <p><b>Other:</b></p> <ul style="list-style-type: none"> <li>• Sundarbans (wetlands)</li> <li>• Tropic of Cancer</li> </ul>	<p><b>Mountains:</b></p> <ul style="list-style-type: none"> <li>• Himalayas</li> <li>• Hindu Kush</li> <li>• Western and Eastern Ghats</li> <li>• Zagros</li> <li>• Urals</li> <li>• Kunlun</li> <li>• Mount Fuji</li> <li>• Tien Shan</li> <li>• Altay</li> </ul> <p><b>Deserts:</b></p> <ul style="list-style-type: none"> <li>• Gobi Desert</li> <li>• Arabian Desert</li> <li>• Taklamakan Desert</li> <li>• Thar Desert</li> <li>• Kara Kum Desert</li> <li>• Iranian Desert</li> </ul>

## Political Map of Asia



## Physical Map of Asia



## Global Geography 4: Europe

### Step 1: Label and Color the following political map of Europe

Regions/Countries	Key Cities	External Bodies of Water
<ul style="list-style-type: none"> <li>• There are five (5) regions of Europe.</li> <li>• Pick a color for each region</li> <li>• Create a key on your map.</li> <li>• Label all the countries.</li> <li>• Color in each region.</li> <li>• Below are the regions</li> </ul>	<ul style="list-style-type: none"> <li>• London</li> <li>• Paris</li> <li>• Berlin</li> <li>• Moscow</li> <li>• Rome</li> <li>• Madrid</li> <li>• Budapest</li> <li>• Kiev</li> <li>• Bucharest</li> <li>• St. Petersburg</li> <li>• Istanbul</li> <li>• Minsk</li> <li>• Bucharest</li> <li>• Vienna</li> <li>• Athens</li> <li>• Warsaw</li> <li>• Amsterdam</li> <li>• Brussels</li> <li>• Barcelona</li> <li>• Milan</li> <li>• Prague</li> </ul>	<ul style="list-style-type: none"> <li>• Mediterranean Sea</li> <li>• Atlantic Ocean</li> <li>• English Channel</li> <li>• Black Sea</li> <li>• Bay of Biscay</li> <li>• Baltic Sea</li> <li>• Irish Sea</li> <li>• Adriatic Sea</li> <li>• Aegean Sea</li> <li>• North Sea</li> <li>• Tyrrhenian Sea</li> <li>• Sea of Azov</li> </ul>

Western	Southern	Central	Eastern	Eurasia
UNITED KINGDOM IRELAND NORWAY ICELAND SWEDEN DENMARK BELGIUM LUXEMBOURG NETHERLANDS FRANCE SPAIN PORTUGAL ANDORRA MONACO	ITALY VATICAN CITY SAN MARINO MALTA GREECE CYPRUS BULGARIA CROATIA BOSNIA/HERZEGOVINA MONTENEGRO KOSOVO SERBIA MACEDONIA ALBANIA	GERMANY SWITZERLAND CZECH REPUBLIC LIECHTENSTEIN AUSTRIA SLOVAKIA HUNGARY SLOVENIA POLAND	FINLAND ESTONIA LATVIA LITHUANIA BELARUS UKRAINE MOLDOVA ROMANIA	RUSSIA TURKEY AZERBAIJAN GEORGIA ARMENIA

**Step 2: Label and Color the following on the physical map of Europe:**

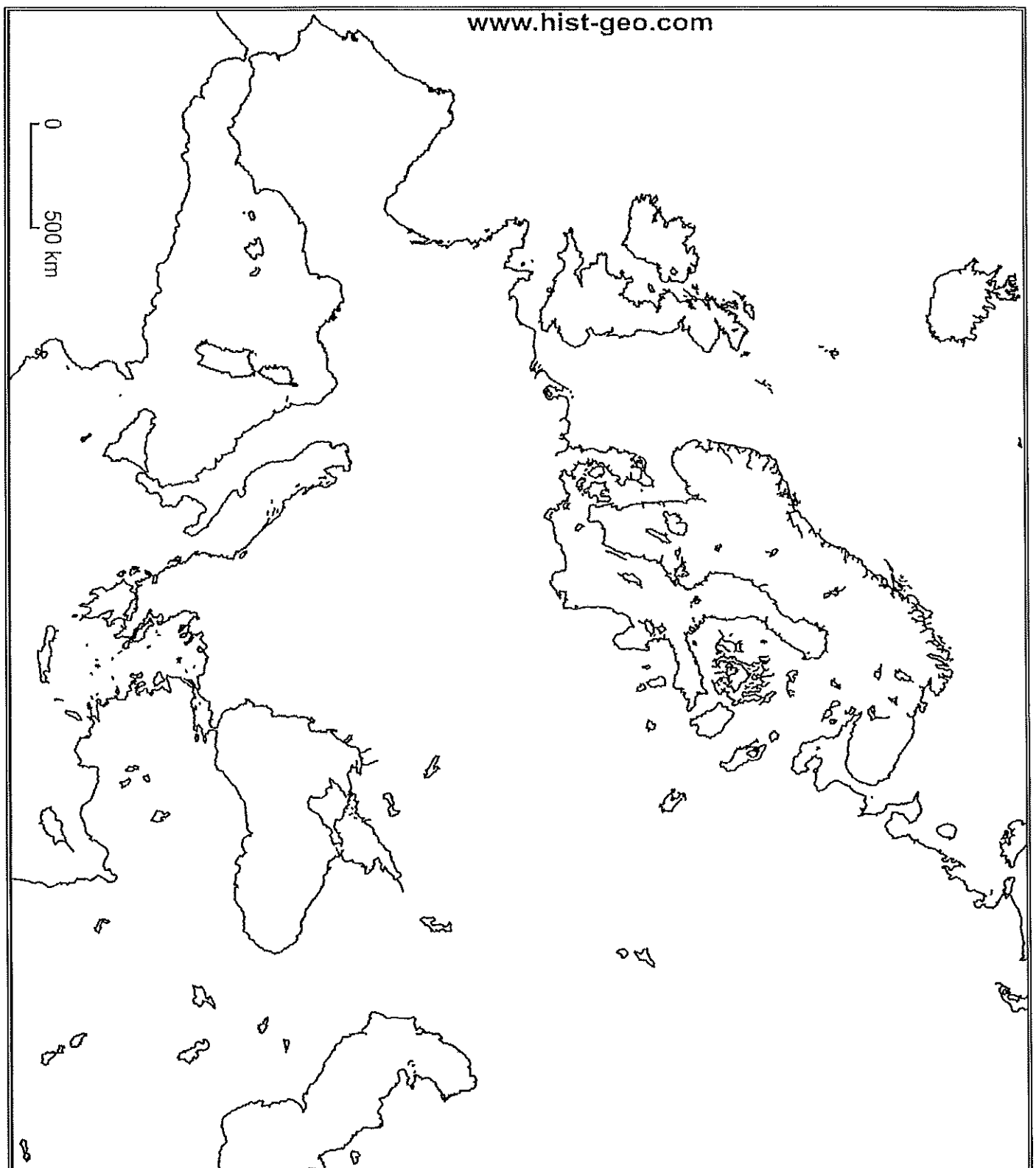
Key Environmental Features	Geographical Features	Geographical Features
<p><b>There are five (5) key ecological areas in Europe.</b></p> <ul style="list-style-type: none"> <li>• Alpine</li> <li>• Arctic Tundra</li> <li>• Conifer Forest</li> <li>• Mediterranean</li> <li>• Deciduous Forest</li> </ul> <p><b>Directions:</b></p> <ul style="list-style-type: none"> <li>• Pick a color for each area.</li> <li>• Create a key on your map.</li> <li>• Color in each area on map.</li> </ul>	<p><b>Internal Bodies of Water:</b></p> <ul style="list-style-type: none"> <li>• Thames River</li> <li>• Danube River</li> <li>• Rhine River</li> <li>• Volga River</li> <li>• Elbe River</li> <li>• Dneiper River</li> <li>• Ural River</li> <li>• Don River</li> <li>• Pechora River</li> <li>• Kama River</li> <li>• Dvina–Vychegda River</li> <li>• Oka River</li> <li>• Belaya River</li> </ul> <p><b>Other:</b></p> <ul style="list-style-type: none"> <li>• Massif Central</li> <li>• Meseta</li> <li>• Great Hungarian Plain</li> <li>• Strait of Gibraltar</li> <li>• Central Russian Uplands</li> </ul>	<p><b>Mountains:</b></p> <ul style="list-style-type: none"> <li>• Alps</li> <li>• Pyrenees</li> <li>• Carpathians</li> <li>• Caucasus</li> <li>• Urals</li> <li>• Kjolén Mountains</li> <li>• Appenines</li> <li>• Dinarics</li> <li>• Scandinavian</li> </ul>

## Political Map of Europe





# Physical Map of Europe



# Global Geography 5: North America

## Step 1: Label and Color the following political map of North America

Regions/Countries	Key Cities	External Bodies of Water
<ul style="list-style-type: none"> <li>There are five (3) regions of North America.</li> <li>Pick a color for each region</li> <li>Create a key on your map.</li> <li>Label all the countries.</li> <li>Color in each region.</li> <li>Below are the regions</li> </ul>	<ul style="list-style-type: none"> <li>New York City</li> <li>Chicago</li> <li>Los Angeles</li> <li>Washington DC</li> <li>Houston</li> <li>Seattle</li> <li>Miami</li> <li>Vancouver</li> <li>Toronto</li> <li>Ottawa</li> <li>Montreal</li> <li>Calgary</li> <li>Mexico City</li> <li>Havana</li> <li>Panama City</li> <li>San Juan</li> <li>Santo Domingo</li> <li>Kingston</li> <li>San Jose (Costa Rica)</li> </ul>	<ul style="list-style-type: none"> <li>Atlantic Ocean</li> <li>Pacific Ocean</li> <li>Arctic Ocean</li> <li>Caribbean Sea</li> <li>Bering Sea</li> <li>Gulf of Mexico</li> <li>Sea of Cortez</li> </ul>
North America	Central America	Caribbean
UNITED STATES CANADA MEXICO	GUATEMALA HONDURAS EL SALVADOR COSTA RICA NICARAGUA PANAMA BELIZE	CUBA JAMAICA BAHAMAS LESSER ANTILLES (island region) HAITI DOMINICAN REPUBLIC TRINIDAD AND TOBAGO PUERTO RICO*

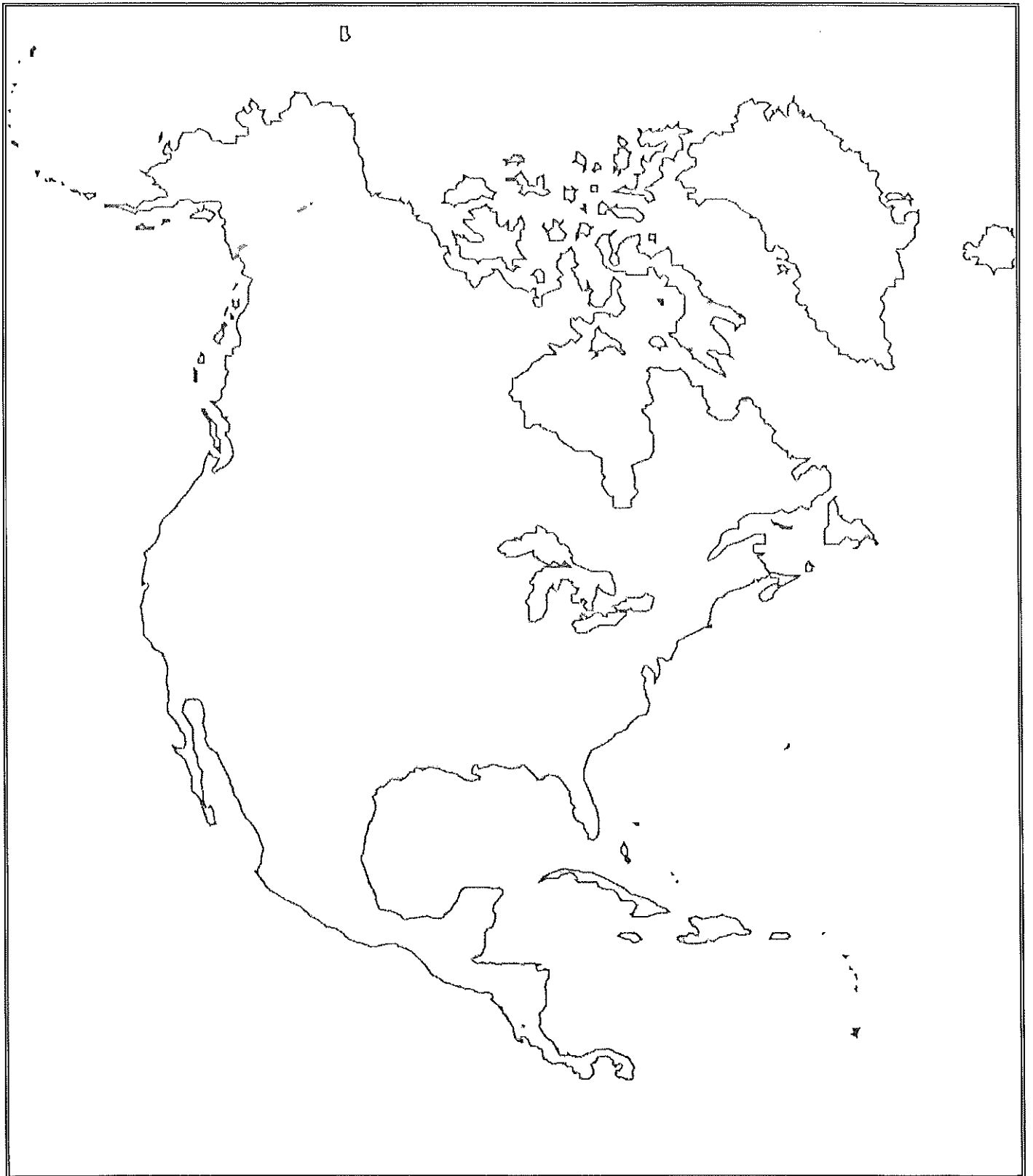
**Step 2: Label and Color the following on the physical map of North America:**

Key Environmental Features	Geographical Features	Geographical Features
<p><b>There are five (7) key ecological areas in North America.</b></p> <ul style="list-style-type: none"> <li>• Desert</li> <li>• Mountains</li> <li>• Arctic Tundra</li> <li>• Grassland</li> <li>• Tropical Rainforest</li> <li>• Coniferous forest</li> <li>• Temperate forest</li> </ul> <p><b>Directions:</b></p> <ul style="list-style-type: none"> <li>• Pick a color for each area.</li> <li>• Create a key on your map.</li> <li>• Color in each area on map.</li> </ul>	<p><b>Internal Bodies of Water:</b></p> <ul style="list-style-type: none"> <li>• Mississippi River</li> <li>• Missouri River</li> <li>• Ohio River</li> <li>• Columbia River</li> <li>• Mackenzie River</li> <li>• Yukon</li> <li>• St. Lawrence</li> <li>• Rio Grande</li> <li>• Nelson River</li> <li>• Colorado River</li> <li>• Great Lakes</li> <li>• Hudson Bay</li> <li>• Chesapeake Bay</li> <li>• Great Salt Lake</li> <li>• Lake Nicaragua</li> </ul> <p><b>Other:</b></p> <ul style="list-style-type: none"> <li>• Tropic of Cancer</li> <li>• Yucatan Peninsula</li> <li>• Everglades</li> <li>• Grand Canyon</li> <li>• Baja Peninsula</li> <li>• Copper Canyon</li> <li>• Panama Canal</li> </ul>	<p><b>Mountains:</b></p> <ul style="list-style-type: none"> <li>• Rockies</li> <li>• Appalachians</li> <li>• Canadian Rockies</li> <li>• Sierra Madres</li> <li>• Cascades</li> <li>• Sierra Nevadas</li> </ul> <p><b>Deserts:</b></p> <ul style="list-style-type: none"> <li>• Great Basin</li> <li>• Sonora</li> <li>• Mojave</li> <li>• Chihuahua</li> </ul>

## Political Map of North America



## Physical Map of North America



## Global Geography 6: Australia & Oceania

### Step 1: Label and Color the following political map of Australia & Oceania

Regions/Countries	Key Cities	External Bodies of Water
<ul style="list-style-type: none"> <li>• There are five (3) regions of Australia and Oceania</li> <li>• Pick a color for each region</li> <li>• Create a key on your map.</li> <li>• Label all the countries.</li> <li>• Color in each region.</li> <li>• Below are the regions</li> </ul>	<ul style="list-style-type: none"> <li>• Sydney</li> <li>• Melbourne</li> <li>• Canberra</li> <li>• Perth</li> <li>• Alice Springs</li> <li>• Wellington</li> <li>• Darwin</li> <li>• Auckland</li> <li>• Port Moresby</li> <li>• Brisbane</li> <li>• Christchurch</li> </ul>	<ul style="list-style-type: none"> <li>• Indian Ocean</li> <li>• Coral Sea</li> <li>• Tasman Sea</li> <li>• Pacific Ocean</li> </ul>
Polynesia	Melanesia	Micronesia
SAMOA TUVALU TONGA	AUSTRALIA PAPUA NEW GUINEA FIJI SOLOMON ISLANDS VANUATU NEW ZEALAND	FEDERAL STATES OF MICRONESIA PALAU KIRIBATI MARSHALL ISLANDS

**Step 2: Label and Color the following physical map of Australia & Oceania:**

Key Environmental Features	Geographical Features	Geographical Features
<p><b>There are five (5) key ecological areas in Australia &amp; Oceania.</b></p> <ul style="list-style-type: none"> <li>• Desert</li> <li>• Mountains</li> <li>• Grassland</li> <li>• Tropical Rainforest</li> <li>• Coniferous /Temperate forest</li> </ul> <p><b>Directions:</b></p> <ul style="list-style-type: none"> <li>• Pick a color for each area.</li> <li>• Create a key on your map.</li> <li>• Color in each area on map.</li> </ul>	<p><b>Internal Bodies of Water:</b></p> <ul style="list-style-type: none"> <li>• Murray River</li> <li>• Murrumbidgee River</li> </ul> <p><b>Other:</b></p> <ul style="list-style-type: none"> <li>• Tasmania</li> <li>• Great Barrier Reef</li> <li>• Outback</li> <li>• Ayers Rock</li> </ul>	<p><b>Mountains:</b></p> <ul style="list-style-type: none"> <li>• Carstenz Pyramid</li> <li>• Southern Alps</li> <li>• Puncak Jaya</li> <li>• Australian Alps</li> </ul> <p><b>Deserts:</b></p> <ul style="list-style-type: none"> <li>• Great Victorian Desert</li> <li>• Gibson Desert</li> </ul>

## Political Map of Australia & Oceania





## Physical Map of Australia & Oceania

